

Advanced Kids Series
First Terminal Evaluation 2077

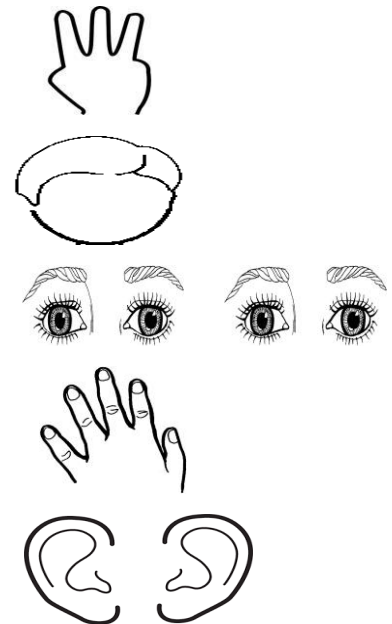

Subject : Maths

Nursery

Name :

Roll No.




1. Count and match the same number of objects.



2. Tick (\checkmark) the odd one and re-write it.

1.	1	2	2	2	<input type="checkbox"/>
2.	1	2	1	1	<input type="checkbox"/>
3.	4	4	3	4	<input type="checkbox"/>
4.	2	2	2	4	<input type="checkbox"/>
5.	5	3	3	3	<input type="checkbox"/>

3. Count the dots and write the number.



1 2 3 4 5

4. उस्तै अङ्कमा जोडा मिलाउनुहोस् र फेरि लेख्नुहोस् ।

१

३

२

१

३

२

४

५

५

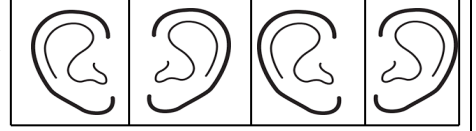
४

5. चित्र गनेर ठीक सङ्ख्यामा गोलो (○) लगाउनुहोस् ।

२

३

४



४

५

६



१

२

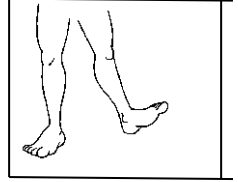
३



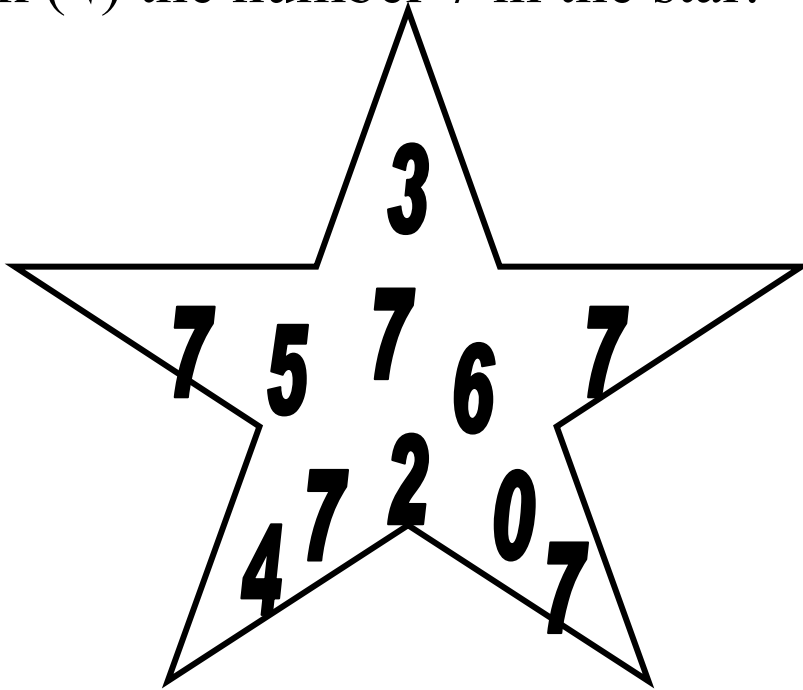
२

३

४

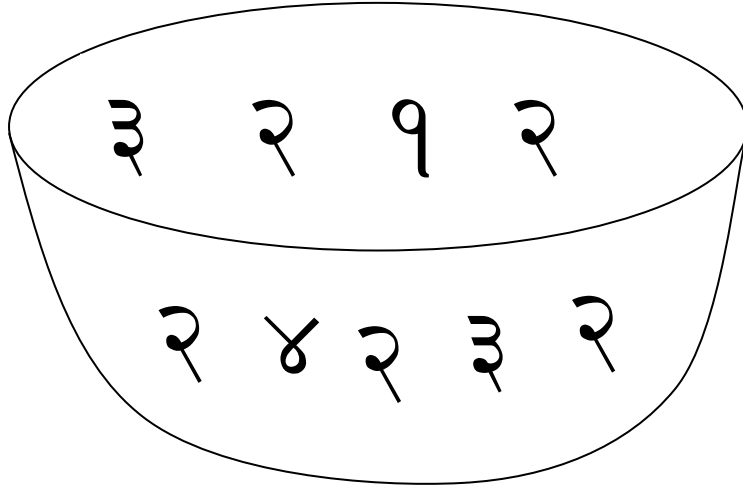


6. Tick (✓) the number 7 in the star.



Write : 7

7. सङ्ख्या २ मा रेजा ($\sqrt{\quad}$) लगाउनुहोस् ।




लेख्नुहोस् ।

२ _____


8. Circle the same number.

5	→	4	5	3	8
6	→	3	2	6	7
7	→	3	5	7	6
8	→	5	8	6	7
9	→	9	7	5	6

9. ५ वटा ताराहरुमा मात्र रङ भर्नुहोस् ,।


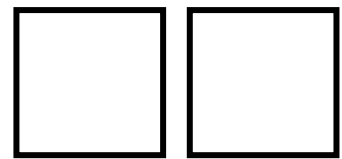


10. Match with the same number and copy.




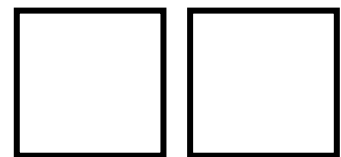
6

8




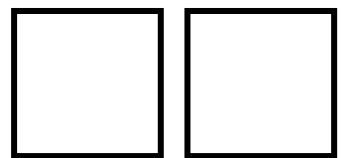
7

6




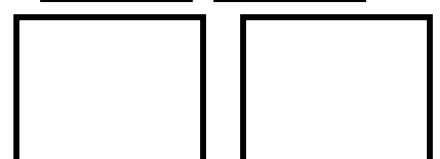
8

9



9

10



10

7

